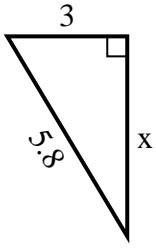


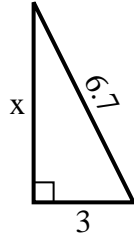


Find the value of X.

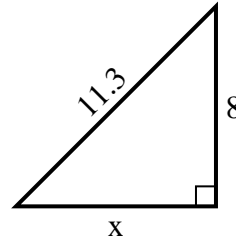
1) perimeter = 13.8 u



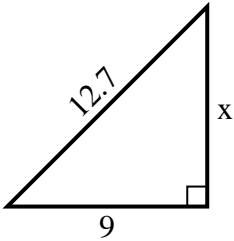
2) perimeter = 15.7 u



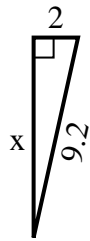
3) perimeter = 27.3 u



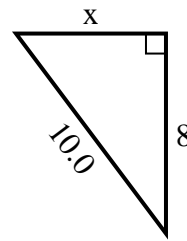
4) perimeter = 30.7 u



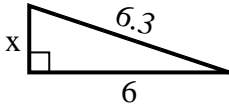
5) perimeter = 20.2 u



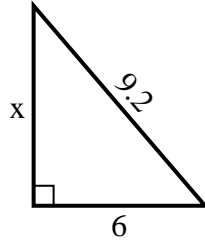
6) perimeter = 24 u



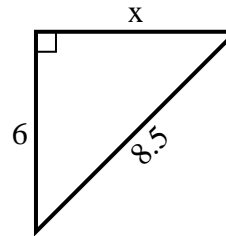
7) perimeter = 14.3 u



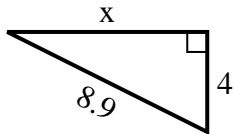
8) perimeter = 22.2 u



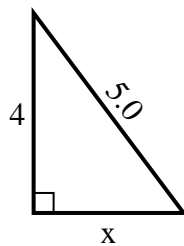
9) perimeter = 20.5 u



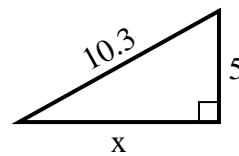
10) perimeter = 20.9 u



11) perimeter = 12 u



12) perimeter = 24.3 u



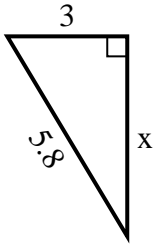
Answers

1. _____
2. _____
3. _____
4. _____
5. _____
6. _____
7. _____
8. _____
9. _____
10. _____
11. _____
12. _____

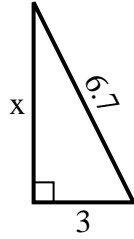


Find the value of X.

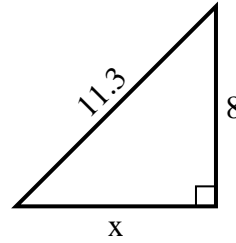
1) perimeter = 13.8 u



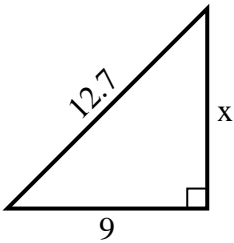
2) perimeter = 15.7 u



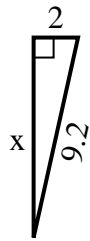
3) perimeter = 27.3 u



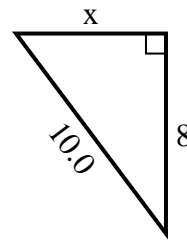
4) perimeter = 30.7 u



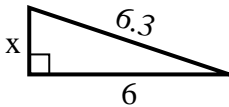
5) perimeter = 20.2 u



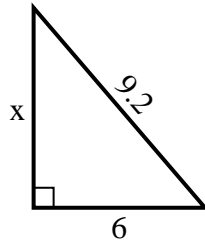
6) perimeter = 24 u



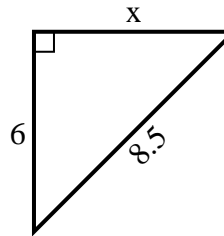
7) perimeter = 14.3 u



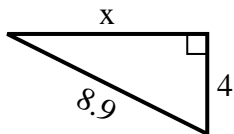
8) perimeter = 22.2 u



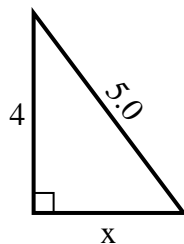
9) perimeter = 20.5 u



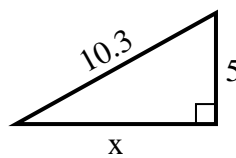
10) perimeter = 20.9 u



11) perimeter = 12 u



12) perimeter = 24.3 u



Answers

1. 5

2. 6

3. 8

4. 9

5. 9

6. 6

7. 2

8. 7

9. 6

10. 8

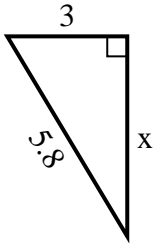
11. 3

12. 9

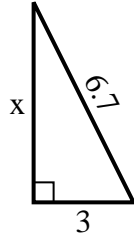


Find the value of X.

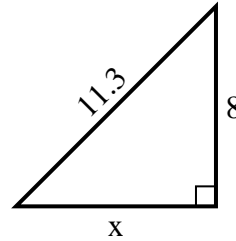
1) perimeter = 13.8 u



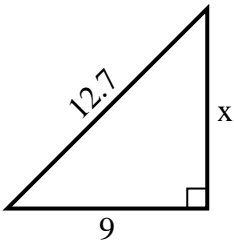
2) perimeter = 15.7 u



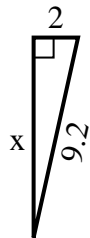
3) perimeter = 27.3 u



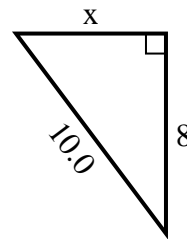
4) perimeter = 30.7 u



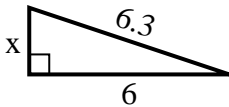
5) perimeter = 20.2 u



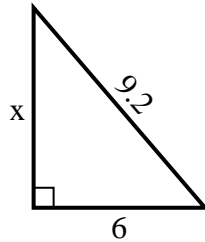
6) perimeter = 24 u



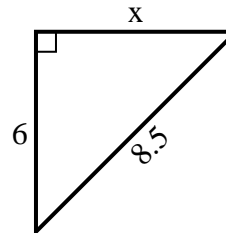
7) perimeter = 14.3 u



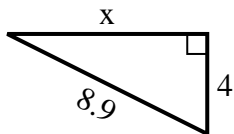
8) perimeter = 22.2 u



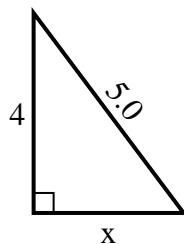
9) perimeter = 20.5 u



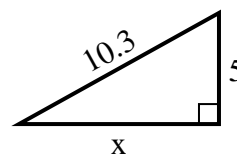
10) perimeter = 20.9 u



11) perimeter = 12 u



12) perimeter = 24.3 u



Answers

1. _____
2. _____
3. _____
4. _____
5. _____
6. _____
7. _____
8. _____
9. _____
10. _____
11. _____
12. _____